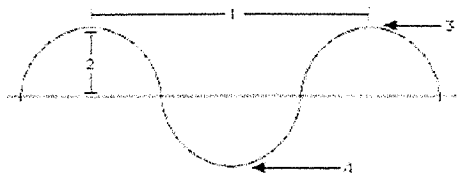


Name: _____

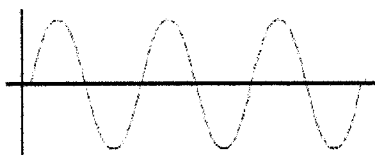
Wave Characteristics Checkpoint

1. Label the wave properties (trough, wavelength, amplitude, crest):



1. _____ 2. _____ 3. _____ 4. _____

2. Identify the waves below as transverse or longitudinal:

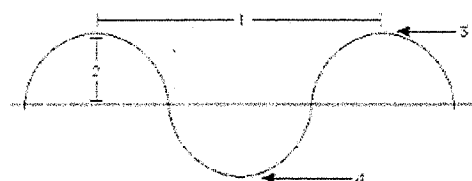


3. A wave has a frequency of 50 Hz and a wavelength of 10 m. What is the speed of the wave?
4. A wave has a frequency of 5 Hz and a speed of 25 m/s. What is the wavelength of the wave?

Name: _____

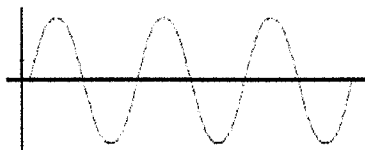
Wave Characteristics Checkpoint

1. Label the wave properties (trough, wavelength, amplitude, crest):



1. _____ 2. _____ 3. _____ 4. _____

2. Identify the waves below as transverse or longitudinal:



3. A wave has a frequency of 50 Hz and a wavelength of 10 m. What is the speed of the wave?
4. A wave has a frequency of 5 Hz and a speed of 25 m/s. What is the wavelength of the wave?